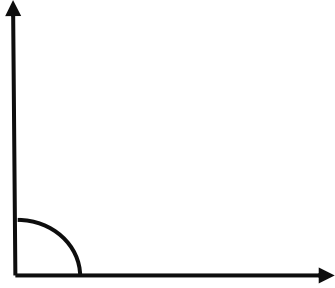
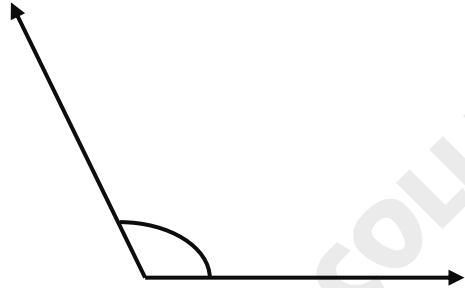
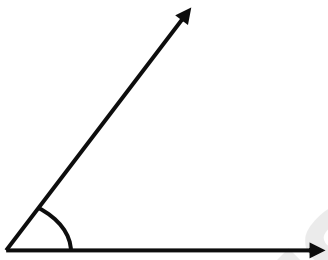


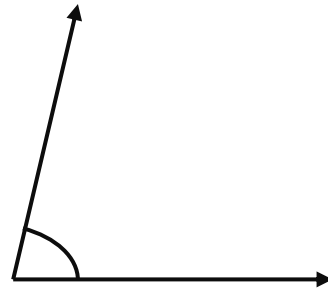
Angles

Measure the angles by using protractor, also classify them as acute, obtuse, right or straight angle.

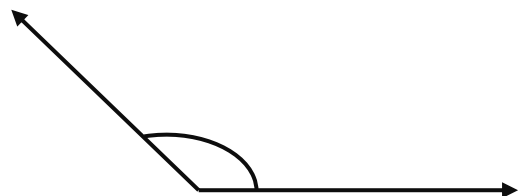












Drawing of angles

Draw and write the types of following angles

70°

135°

120°

35°

90°


180°

Perpendicular or parallel lines


Draw the correct line to complete each set of lines.




perpendicular



parallel



perpendicular



parallel




parallel



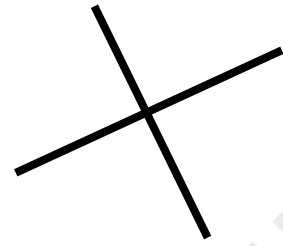
perpendicular

Perpendicular or parallel lines


Check the correct box for each set of lines.



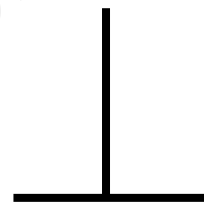
- parallel
- perpendicular



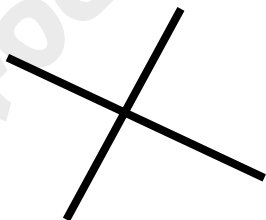
- parallel
- perpendicular



- parallel
- perpendicular



- parallel
- perpendicular



- parallel
- perpendicular



- parallel
- perpendicular