


# Time in digits


Read the time and write in hours, minutes and seconds



4 : 10 : 45



\_\_\_\_\_



\_\_\_\_\_




\_\_\_\_\_



\_\_\_\_\_



\_\_\_\_\_



\_\_\_\_\_



\_\_\_\_\_

**Time in a.m. or p.m.**  
Read the time and choose the correct answer

**You reach at school**

- 8:00 am
- 8:00 pm

**You brush your teeth**

- 7:10 am
- 5:10 pm

**You take dinner**

- 8:00 am
- 8:00 pm

**You watch television**

- 8:30 am
- 8:30 pm

**You play with your friends**

- 5:00 am
- 5:00 pm

**You study in the class**

- 10:00 am
- 10:00 pm

**You take breakfast**

- 7:30 am
- 7:30 pm

**You do your homework**

- 5:00 am
- 5:00 pm

**When do you get up?**

- 6:30 am
- 7:30 pm

**You take your lunch at**

- 2:00 am
- 2:00 pm

**You go for a morning walk**

- 6:45 am
- 6:00 pm


**You go to sleep**

- 10:00 am
- 10:00 pm

# Analogue and Digital time


Draw the lines to match the analog and digital time

4:00 pm




14:00

5:00 pm




16:00

11:00 pm




17:00

2:00 pm



23:00

10:00 pm



20:00

8:00 pm



22:00