
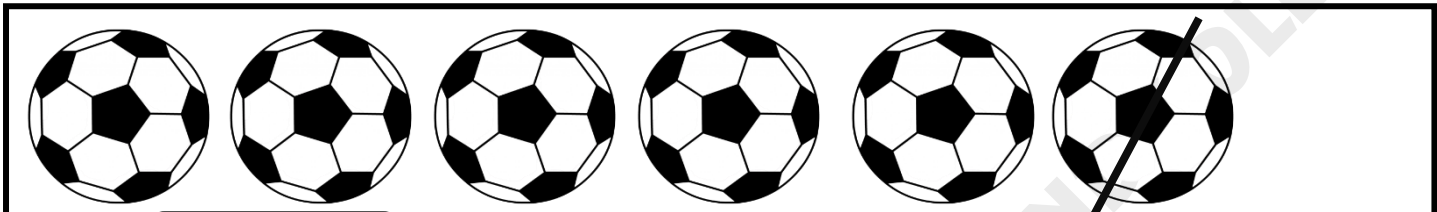



Count and write
Count the objects and write the subtraction sentence



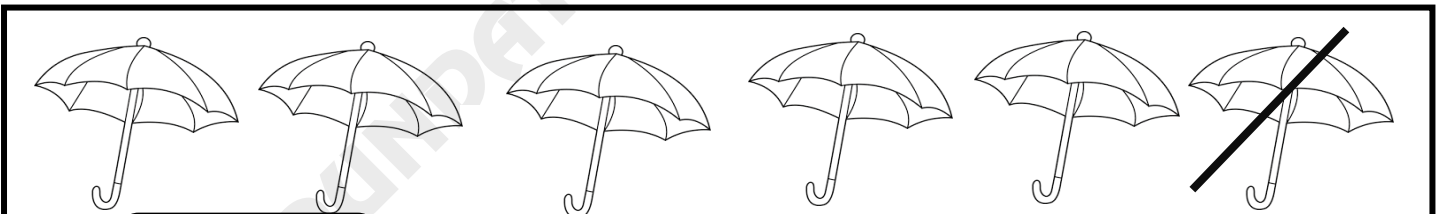
- =



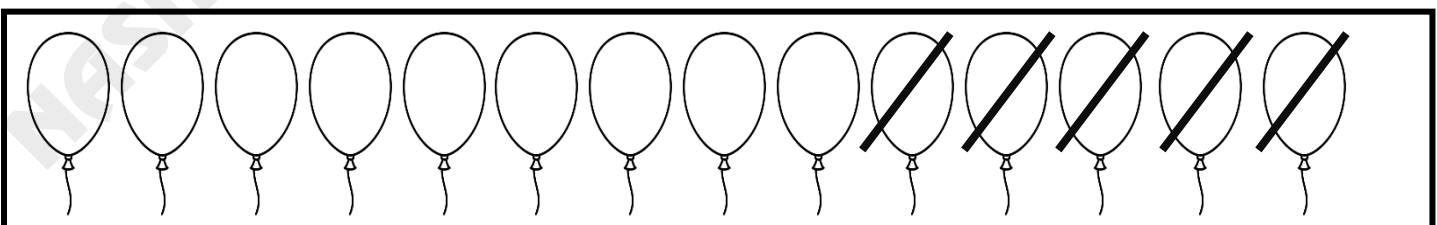
- =



- =



- =



- =

Subtraction sentence

Add and write subtraction sentence for the following questions

2 less than 6

$$6 - 2 = 4$$

4 less than 9

$$\underline{\quad} - \underline{\quad} = \underline{\quad}$$

1 less than 2

$$\underline{\quad} - \underline{\quad} = \underline{\quad}$$

6 less than 7

$$\underline{\quad} - \underline{\quad} = \underline{\quad}$$

7 less than 9

$$\underline{\quad} - \underline{\quad} = \underline{\quad}$$

6 less than 12

$$\underline{\quad} - \underline{\quad} = \underline{\quad}$$

3 less than 19

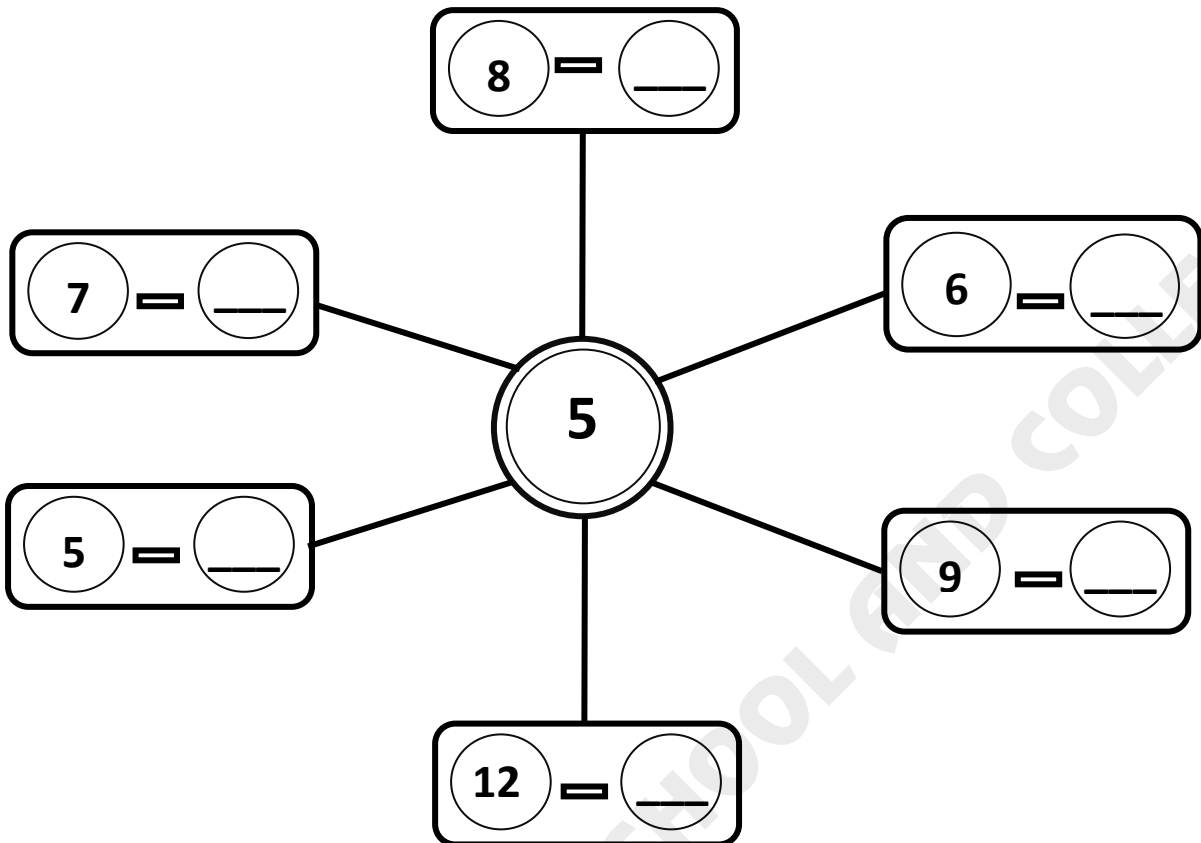
$$\underline{\quad} - \underline{\quad} = \underline{\quad}$$

8 less than 16

$$\underline{\quad} - \underline{\quad} = \underline{\quad}$$

Having the same number

Which number we will subtract to get 5



Subtracting 1

Lets have fun with subtracting 1

2 - 1 =

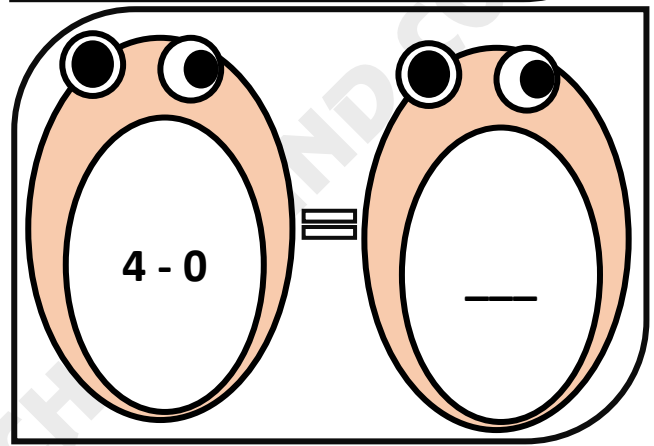
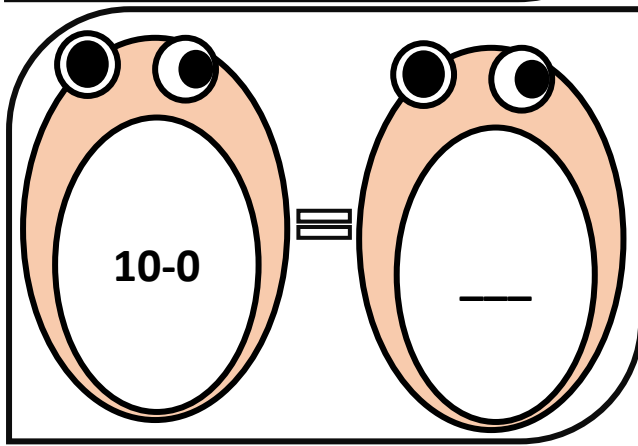
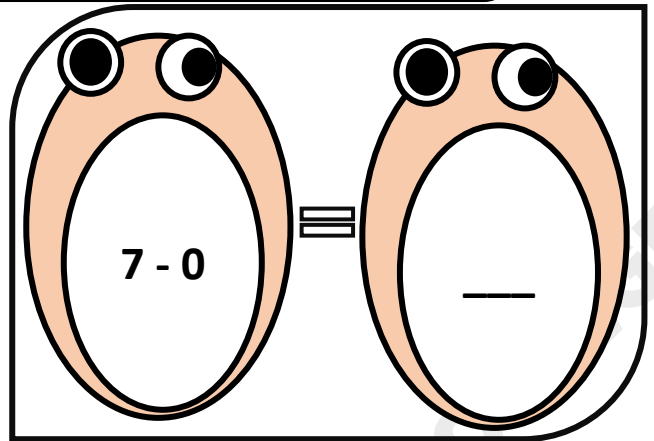
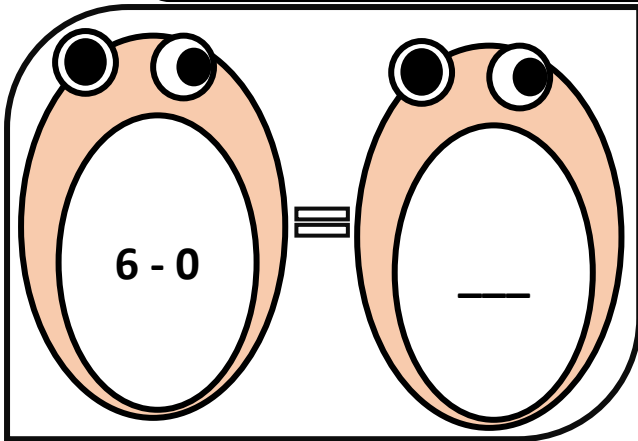
6 - 1 =

12 - 1 =

9 - 1 =

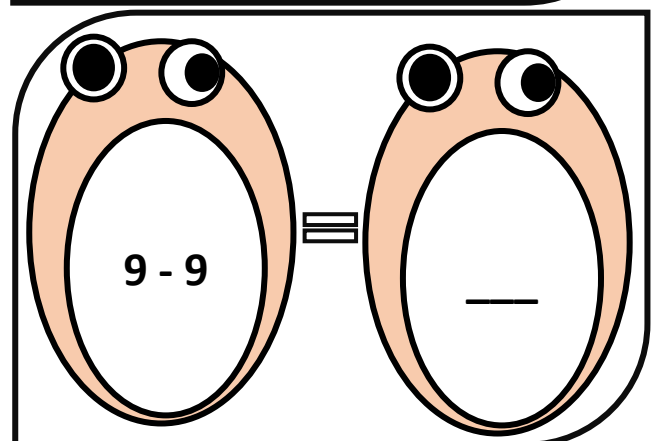
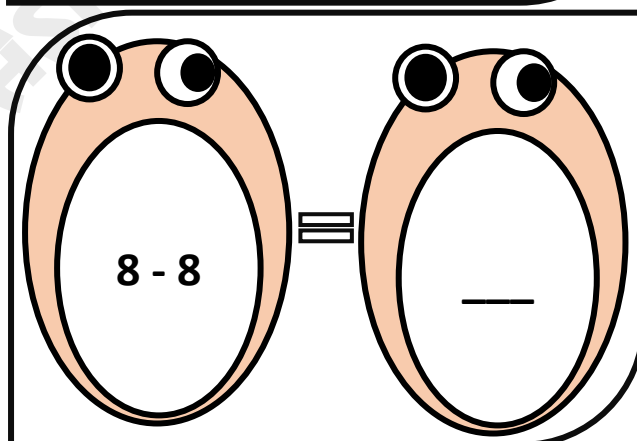
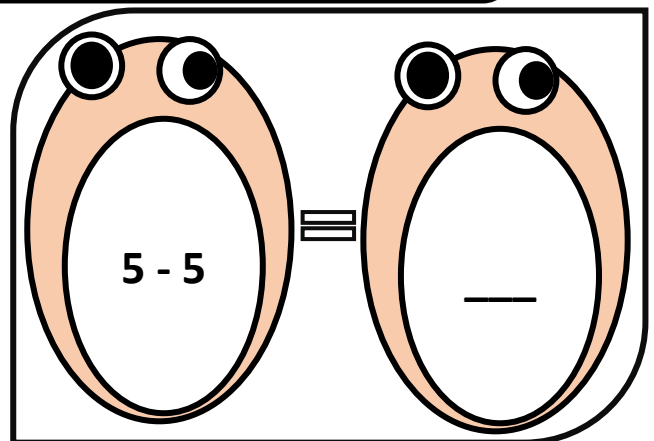
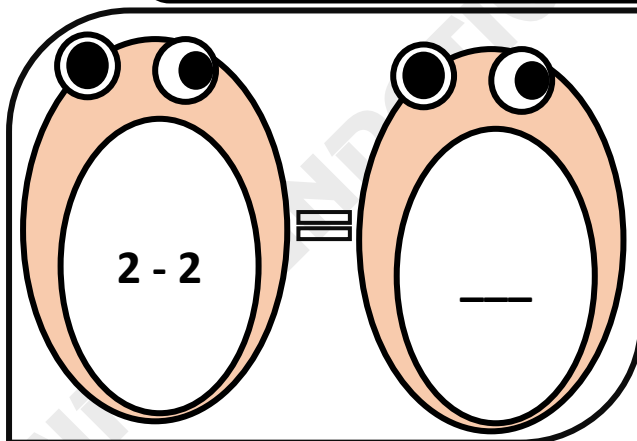
Subtracting zero

Lets have fun with subtracting zero



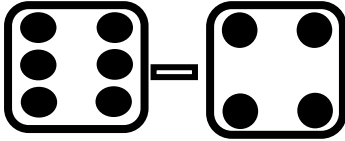
Subtracting the same number

Subtract the same number

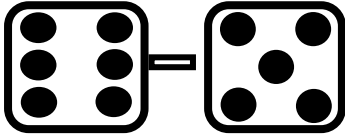


Subtraction

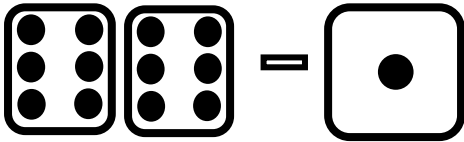
Subtract the number of dominoes and match with the correct answer



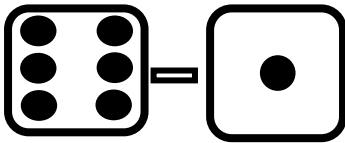
11



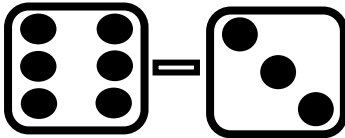
5



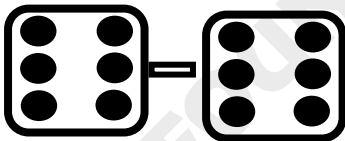
10



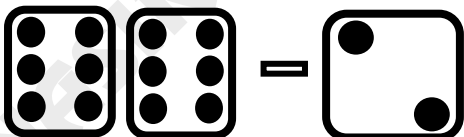
4



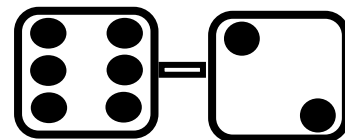
1



2



0



3

Subtraction sentence

Read the Subtraction sentence and choose the correct answer

4 less than 17 is

12

13

14

6 less than 12 is

6

7

8

7 less than 15 is

3

7

8

5 less than 12 is

7

8

9

7 less than 21 is

13

14

15

Subtraction sentence

Pick out the correct subtraction sentence

We can get 4 by

$12 - 5$

$8 - 4$

$6 - 3$

We can get 3 by

$8 - 3$

$8 - 6$

$8 - 2$

We can get 1 by

$11 - 5$

$12 - 5$

$6 - 5$

We can get 6 by

$12 - 6$

$12 - 5$

$12 - 8$

We can get 5 by

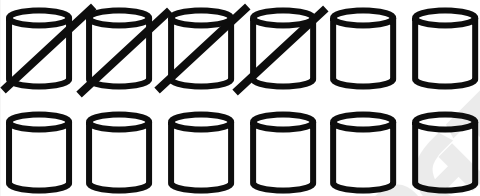
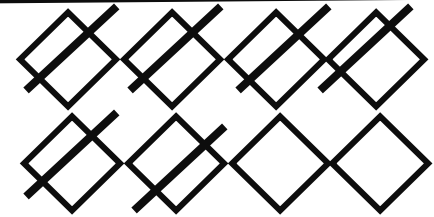
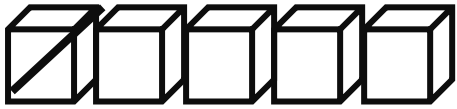
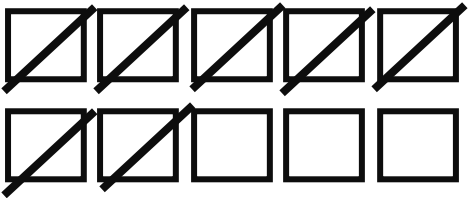
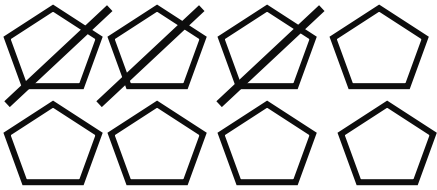
$9 - 5$

$10 - 5$

$11 - 5$

Subtraction

Match with the correct answer



8

7

4

3

2

5

1

0

Vertical subtraction

Subtract the following numbers

T	U
1	9
-	6
<input type="text"/>	

T	U
2	8
-	4
<input type="text"/>	

T	U
3	5
-	3
<input type="text"/>	

T	U
5	9
-	7
<input type="text"/>	

T	U
6	6
-	5
<input type="text"/>	

T	U
4	4
-	4
<input type="text"/>	

T	U
5	8
-	0
<input type="text"/>	

T	U
8	6
-	3
<input type="text"/>	

T	U
3	4
-	2
<input type="text"/>	

T	U
5	6
-	2
<input type="text"/>	

T	U
3	0
-	2
<input type="text"/>	

T	U
1	5
-	1
<input type="text"/>	

T	U
4	4
-	3
<input type="text"/>	

T	U
6	9
-	2
<input type="text"/>	

T	U
7	5
-	1
<input type="text"/>	

T	U
1	0
-	1
<input type="text"/>	

T	U
6	3
-	2
<input type="text"/>	

T	U
8	4
-	1
<input type="text"/>	

T	U
6	7
-	1
<input type="text"/>	

T	U
1	7
-	1
<input type="text"/>	

Subtraction word problems

Read the statements and solve

You have 7 balloons and your friend has 3 balloons. How many more balloons you have than your friend?

A spiral-bound notebook with five horizontal lines for writing the solution to the first problem.

You have 9 cookies and you ate 5 of them. How many cookies do you have left?

A spiral-bound notebook with five horizontal lines for writing the solution to the second problem.

Ali has 8 flowers in his Garden. He gave 4 of them to his mother. How many flowers are left?

A spiral-bound notebook with five horizontal lines for writing the solution to the third problem.

Sana has 12 crayons. She lost 9 of them. How many crayons does she have now?

A spiral-bound notebook with five horizontal lines for writing the solution to the fourth problem.