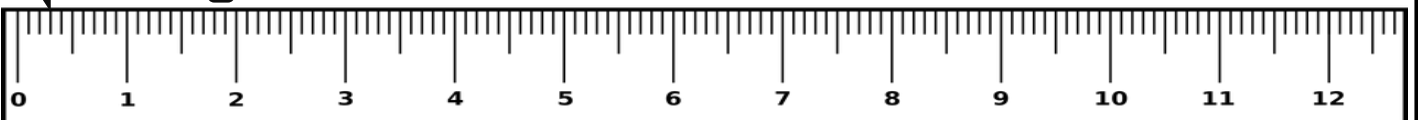
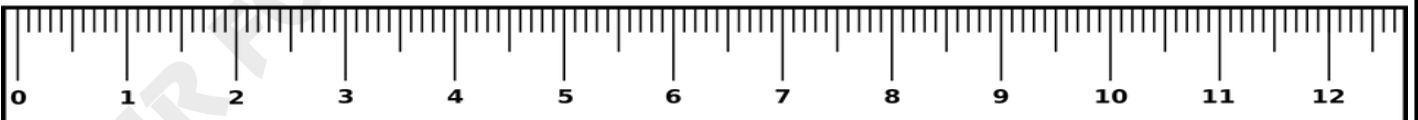
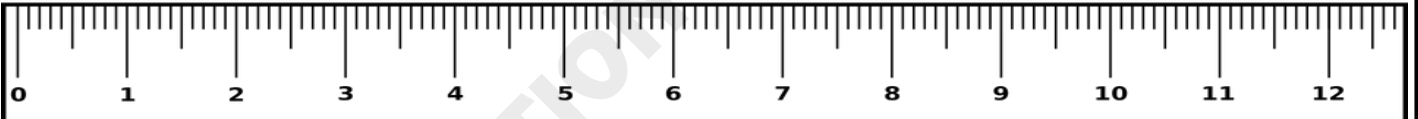
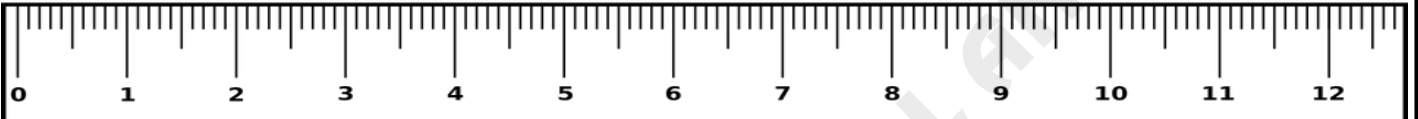
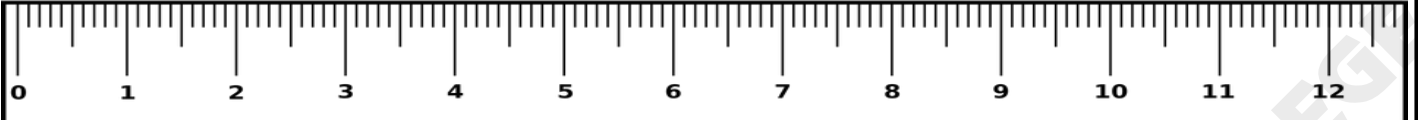


Measuring length

Measure the length of pencil in Centimeters



Conversion of centimeters to millimeters

Convert centimeters to millimeters

Centimeters	Millimeters
7	
11	
18	
24	
65	

Conversion of centimeters to millimeters

Convert centimeters to millimeters and choose the correct answer

4 cm = _____ mm

14

40

400

12 cm = _____ mm

120

112

200

51 cm = _____ mm

5.1

510

500

10 cm = _____ mm

100

10

20

32 cm = _____ mm

20

300

320

22 cm = _____ mm

200

220

40

19 cm = _____ mm

190

100

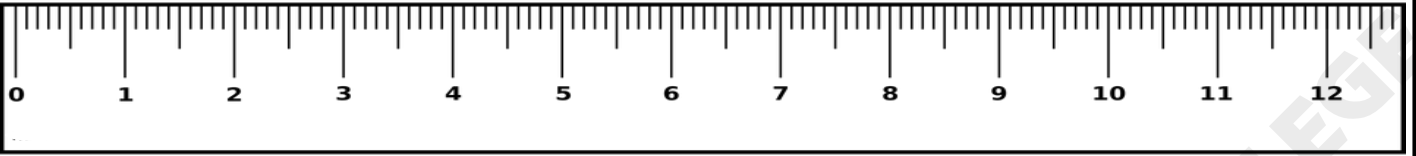
900

Measuring length

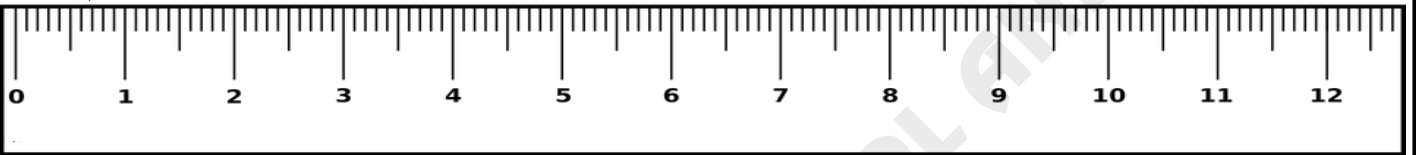
Measure the length of pencil in Centimeters and millimeters



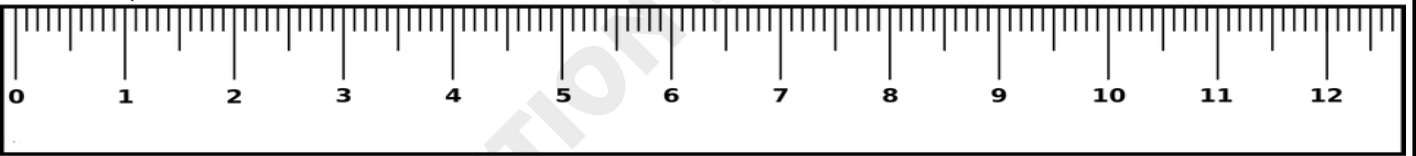
___ m ___ mm



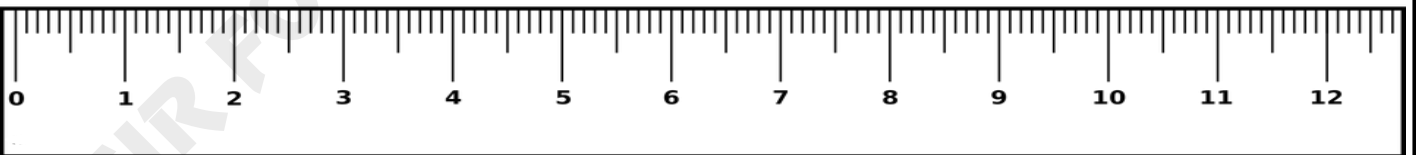
___ m ___ mm



___ m ___ mm



___ m ___ mm



___ m ___ mm

