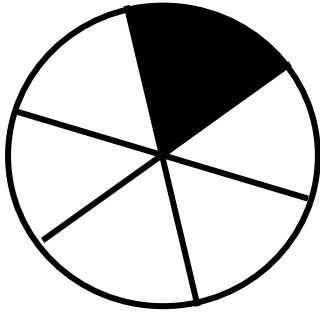





# Fraction


What fraction of each shape is shaded





# Fraction


Circle the correct fraction.



2	2	2
7	6	8




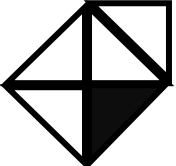



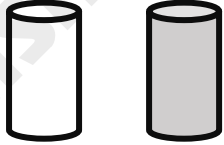
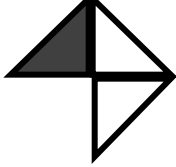
4	5	4
9	4	5



1	3	1
5	6	6

# Fraction

Write the fraction, its numerator and denominator

	Fraction	Numerator	Denominator
	$\frac{\square}{\square}$	<input type="text"/>	<input type="text"/>
	$\frac{\square}{\square}$	<input type="text"/>	<input type="text"/>
	$\frac{\square}{\square}$	<input type="text"/>	<input type="text"/>
	$\frac{\square}{\square}$	<input type="text"/>	<input type="text"/>
	$\frac{\square}{\square}$	<input type="text"/>	<input type="text"/>
	$\frac{\square}{\square}$	<input type="text"/>	<input type="text"/>
	$\frac{\square}{\square}$	<input type="text"/>	<input type="text"/>